



Wada Nirmiti Education Society's
GURUKUL GLOBAL SCHOOL
WORKSHEET

SUB: Maths

LESSON: 2. Shapes Around Us

STD:II

NAME: _____ ROLL No: _____ DATE: _____

A. Match the object with its shape:

Object

Shape

Ball

Cube

Dice

Sphere

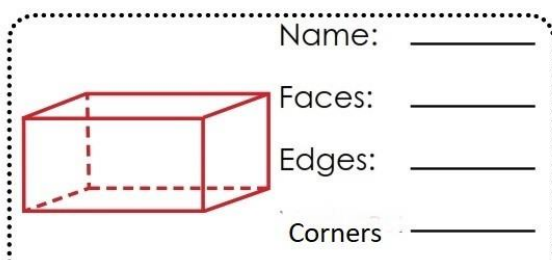
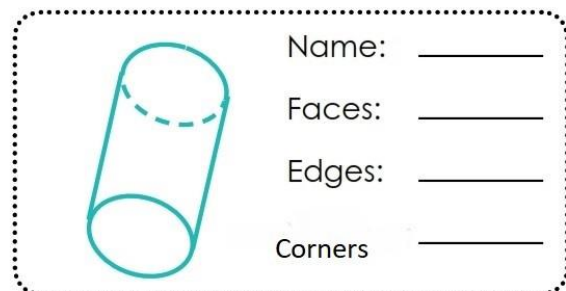
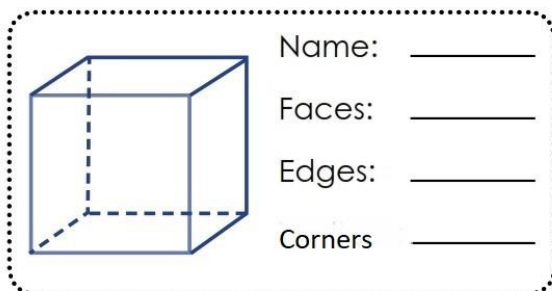

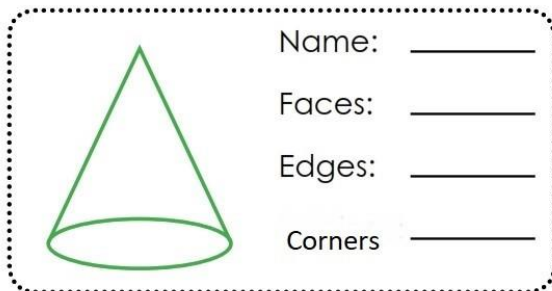
Ice cream cone

Cuboid

Book

Cone

B. Look at the shapes and fill the information



C. Select the correct option

Q1. Which shape is round?

- a) Square b) Triangle c) Circle d) Rectangle

Q2. Which shape has 3 sides?

- a) Square b) Triangle c) Circle d) Rectangle

Q3. Which object is shaped like a sphere?

- a) Book b) Ball c) Dice d) Box

Q4. Which shape has 4 equal sides?

- a) Rectangle b) Triangle c) Square d) Circle

Q5. Which shape looks like a box?

- a) Cube b) Cone c) Sphere d) Cylinder

Q6. Which shape can roll?

- a) Cube b) Sphere c) Square d) Rectangle

Q7. Which object is shaped like a cone?

- a) Ice cream cone b) Ball c) Book d) Dice

Q8. Which shape has no corners?

- a) Triangle b) Square c) Circle d) Rectangle

Q9. Which object is shaped like a cylinder?

- a) Dice b) Water bottle c) Ball d) Pizza slice

Q10. Which shape has 6 faces?

- a) Sphere b) Cone c) Cube d) Circle

Q11. Which shape can both roll and slide?

- a) Sphere b) Cube c) Cylinder d) Square

Q12. Which shape has 4 sides but not all equal?

- a) Square b) Rectangle c) Triangle d) Circle